



Puzzle Time

If Seagulls Fly Over The Sea, What Flies Over The Bay?

Write the letter of each answer in the box containing the exercise number.

Match the inequality with its graph.

1. $y + 2x^2 < -x^2 - 2$ 2. $y \geq \frac{1}{2}x^2 - 5$

3. $-10x^2 - 2y > 4$ 4. $4y + 3x^2 \leq -8$

5. $-x^2 - y < -3$ 6. $\frac{y + 2x^2}{3} \geq -1$

Answers

L. A

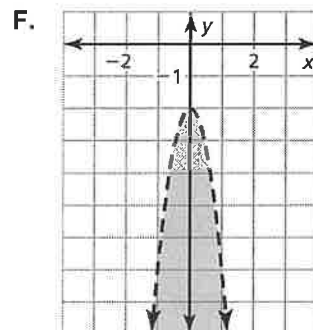
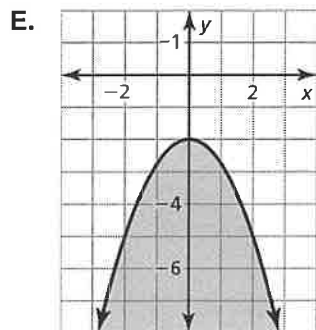
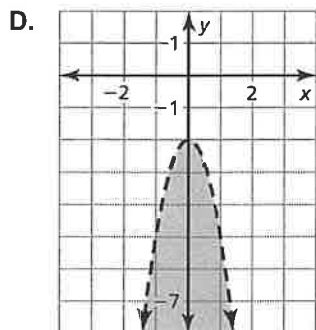
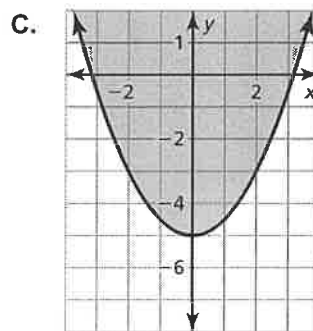
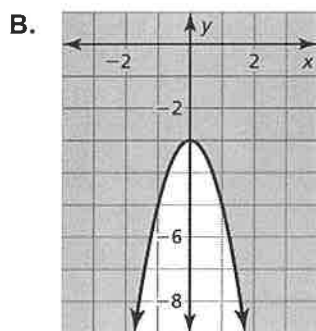
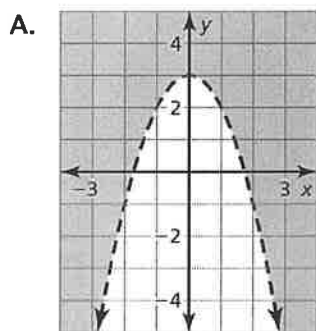
G. F

B. D

A. C

E. E

S. B



1	2	3	4	5	6
---	---	---	---	---	---